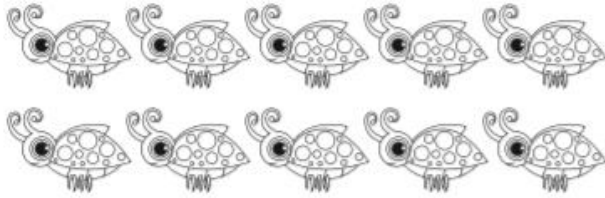



# Equal rows

Group and share

1 Complete the sentence.



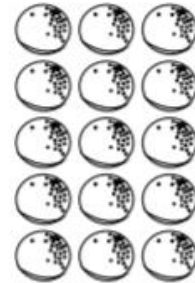
\_\_\_ rows of \_\_\_ = \_\_\_



\_\_\_ rows of \_\_\_ = \_\_\_



\_\_\_ rows of \_\_\_ = \_\_\_



\_\_\_ rows of \_\_\_ = \_\_\_

2 Draw.


9 stars put into 3 equal rows

8 eggs put into 4 equal rows

# Equal groups

Group and share

1 Circle 2 equal groups. Complete the sentence.




2 groups of  $\underline{\quad}$  =  $\underline{\quad}$



2 groups of  $\underline{\quad}$  =  $\underline{\quad}$

2 Circle 3 equal groups. Complete the sentence.



3 groups of  $\underline{\quad}$  =  $\underline{\quad}$



3 groups of  $\underline{\quad}$  =  $\underline{\quad}$

3 Draw.

3 groups of 5 bananas

2 groups of 4 balloons