

New Zealand Birds Addition

Write the answers in the circles. Then write the number sentence on the line below.

 $+$  $=$ 

 $+$  $=$ 




 $+$  $=$ 

 $+$  $=$ 

 $+$  $=$ 

New Zealand Birds Addition




Write the answers in the circles. Then write the number sentence on the line below.

 $+$  $=$ 

 $+$  $=$ 


 $+$  $=$ 

 $+$  $=$ 


 $+$  $=$ 

New Zealand Birds Addition


Write the answers in the circles. Then write the number sentence on the line below.



+





=



+





=




+




=



+



=



+



=

