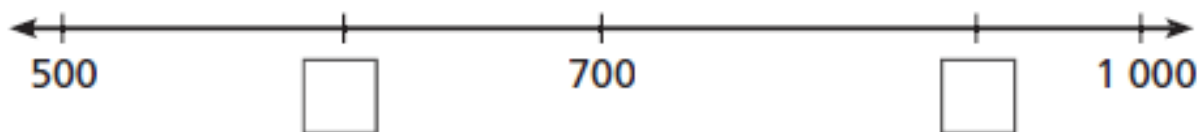
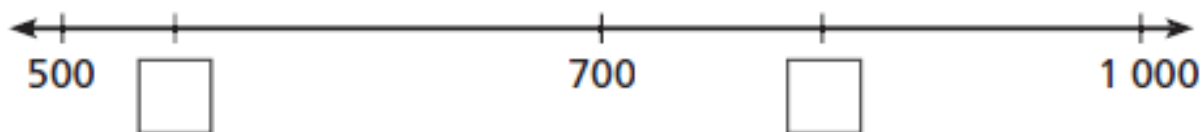
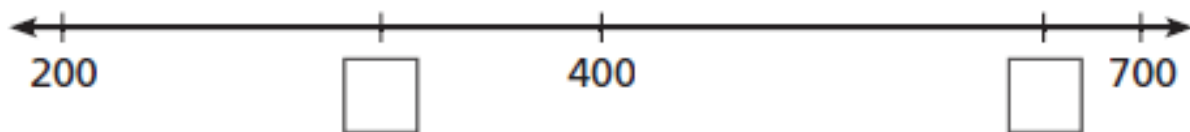
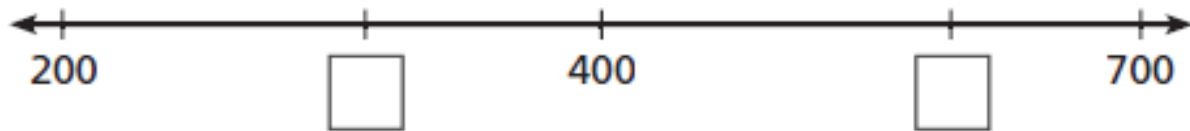


I am learning to:

- show the value of three-digit numbers on a number line
- apply my place value knowledge.



What do you think the missing numbers are? Fill in the boxes then check your answers with a partner.



Draw a line to link the boxes that have the same value. The first one has been done for you.

65 tens
23 tens
76 tens
94 tens
82 tens
15 tens

two hundred and thirty
nine hundred and forty
one hundred and fifty
seven hundred and sixty
six hundred and fifty
eight hundred and twenty